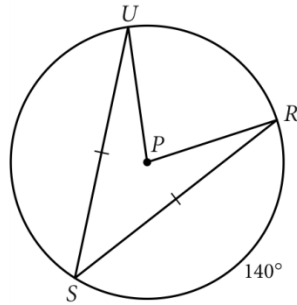


Name _____ Period _____

Take Home Quiz/Review for Chapter 10 Test
This is NOT comprehensive.

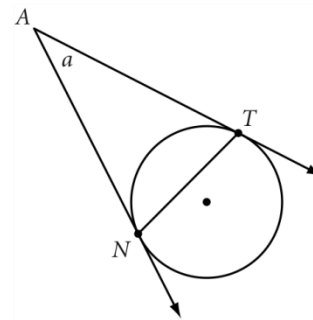
Part 1: Find the indicated values.

1. $m\angle P = \underline{\hspace{2cm}}$

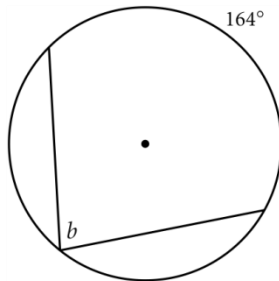


2. \overleftrightarrow{AT} and \overleftrightarrow{AN} are tangents.
 $m\angle ATN = 72^\circ$

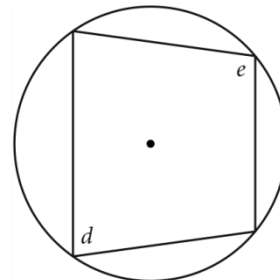
$a = \underline{\hspace{2cm}}$



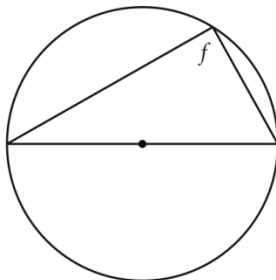
3. $b = \underline{\hspace{2cm}}$



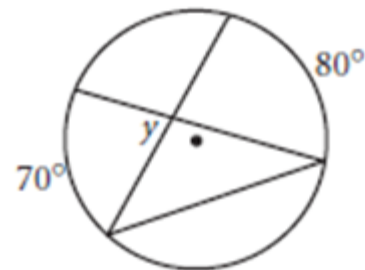
4. $d + e = \underline{\hspace{2cm}}$



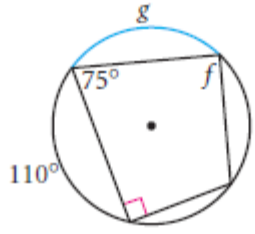
5. $f = \underline{\hspace{2cm}}$



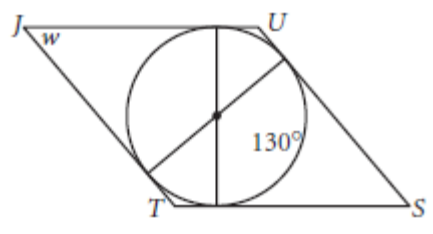
6. $y = \underline{\hspace{2cm}} \text{ (h)}$



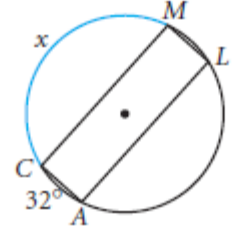
6. $f = \underline{\quad ? \quad}$
 $g = \underline{\quad ? \quad}$



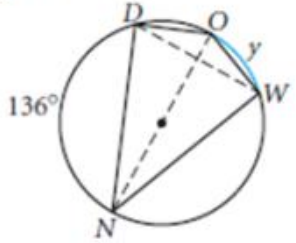
7. *JUST* is a rhombus.
 $w = \underline{\quad ? \quad}$



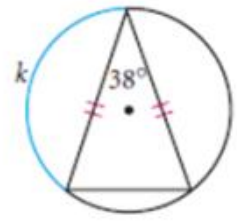
8. *CALM* is a rectangle.
 $x = \underline{\quad ? \quad}$



9. *DOWN* is a kite.
 $y = \underline{\quad ? \quad}$



10. $k = \underline{\quad ? \quad}$



11. $r = \underline{\quad ? \quad}$
 $s = \underline{\quad ? \quad}$

